




Jméno: _____



Tajenka 1: _____

1	2	3	4	5	6	7	8
A	C	E	I	K	L	R	S

Tajenka 2:

5	7	1	8	6	4	2	3

Nakresli tajenku:

$9 - 5 = \underline{\quad}$	L
$10 - 4 = \underline{\quad}$	Z
$11 - 10 = \underline{\quad}$	P
$18 - 10 = \underline{\quad}$	A
$8 - 6 = \underline{\quad}$	O
$2 + 5 = \underline{\quad}$	K
$2 + 3 = \underline{\quad}$	Á
$1 + 2 = \underline{\quad}$	M

Tajenka 3:

1	2	3	4	5	6	7	8

Nakresli tajenku:

Přeji vám nádherné _____ (tajenka 1), aby se vám
 podařila krásná _____ (tajenka 2) a kluci měli
 bohatou _____ (tajenka 3).